

UPDATED

NCEEE

NATIONAL COMMON ENTRANCE EXAMINATION

PAST QUESTIONS COMPILATION

**INTO JSS 1 OF FEDERAL GOVERNMENT
UNITY COLLEGES**

All Paper/Subjects with Solution



- **PAPER I**
Part A – Mathematics and Basic Science & Technology
Part B – English Studies and National Values Education
- **PAPER II**
Part A – Quantitative and Vocational Aptitude
Part B – Verbal Aptitude



WHATSAPP +2348051311885

2022 National Common Entrance Examination (NCEE)

PAPER I. ACHIEVEMENT TEST TIME ALLOWED: 2 hours 10 mins.

Part A: MATHEMATICS AND BASIC SCIENCE AND TECHNOLOGY

Part B: ENGLISH STUDIES AND NATIONAL VALUES EDUCATION

INSTRUCTIONS TO CANDIDATES:

Do not open this booklet until you are told to do so. While you are waiting, read the following carefully.

- There are sixty questions in Mathematics and Basic Science and Technology paper for which you are allowed 65 minutes. Also, there are sixty questions in English Studies and National Values Education paper for which you are allowed 65 minutes.
- Use HB pencil throughout.
- All diagrams in Mathematics are not drawn to scale.
- Check that the details printed on your answer sheet are correct.
 - In the space marked "Name", check that your name is printed correctly.
 - In the box marked "Examination Number", check that the digits of your examination number are correctly printed in the spaces on the left-hand side. There are numbered spaces in line with each of these digits. For each digit, the space with same number as the digit has been shaded.
 - In the box marked "Sex", check that the space marked "M" has been shaded if you are a male, or "F" if you are a female.

An example is given below for a male candidate whose examination number is 413257AE.

- When you have chosen the answer to a question, shade the space which has the same letter as the letter of the answer you have chosen. Shade it like this [A] [B] [C] [D] [E]

EXAMINATION NUMBER							
4	1	3	2	5	7	A	E
[0]	[0]	[0]	[0]	[0]	[0]	[A]	[A]
[1]	[1]	[1]	[1]	[1]	[1]	[B]	[B]
[2]	[2]	[2]	[2]	[2]	[2]	[C]	[C]
[3]	[3]	[3]	[3]	[3]	[3]	[D]	[D]
[4]	[4]	[4]	[4]	[4]	[4]	[E]	[E]
[5]	[5]	[5]	[5]	[5]	[5]	[F]	[F]
[6]	[6]	[6]	[6]	[6]	[6]	[G]	[G]
[7]	[7]	[7]	[7]	[7]	[7]	[H]	[H]
[8]	[8]	[8]	[8]	[8]	[8]	[I]	[I]
[9]	[9]	[9]	[9]	[9]	[9]	[J]	[J]

SEX	
Indicate your sex by shading M (Male)	<input checked="" type="checkbox"/> M
F (Female)	<input type="checkbox"/> F

- Leave extra spaces blank if the answer spaces provided are more than you need.
- Do not make any marking(s) across the heavy black marks at the right edge of your answer sheet.
- Think carefully before you shade the answer spaces. Erase completely any answer(s) you wish to change.
- Do not shade more than one answer space for a question (if you do, you will score zero for that question).
- When you are told to begin, answer the questions as quickly and carefully as you can. If you cannot answer a question, do not spend too much time on it, but try the next one.
- Do not ask any question(s) once the examination has started. The Supervisor is not allowed to explain any question(s) to you during the examination.

National Common Entrance Examination NCEE Past Questions and Answers Free PDF Download

Parents/Guardians, is your child seeking for Admission into Junior Secondary School (JSS 1) of Federal Government Unity College.

Are you searching for National Common Entrance Examination NCEE Past Questions.

If yes, you are on the right page.

We are glad to inform you that we now have NCEE Past Questions and Answers for download in PDF/Msword Format.

The Importance of using past questions to prepared for National Common Entrance Examination cannot be over emphasized.

Past questions help to give insight on areas one is good, weak and need assistance to perform well.

If you want to have a pass with a good score, it is wise to get hold of NCEE past questions and study them

Key Benefits of using NCEE Past Questions to Practice

Speed.

Exposure.

Decrease chances of exam anxiety

NCEE Past Questions List of Paper/Subject Available for Download.

SUBJECT STRUCTURE OF THE EXAMINATION

PAPER 1. ACHIEVEMENT TEST	
Part A.	01. Mathematics and 02. Basic Science & Technology Basic Science Physical and Health Education Basic Technology Computer Studies
Part B.	03. English Studies and 04. National Values Education Social Studies Civic Education Security Education
PAPER 2. APTITUDE TEST	
Part A.	05. Quantitative Aptitude 06. Vocational Aptitude
Part B.	07. Verbal Aptitude

National Common Entrance Examination NCEE **Past Questions and Answers Free PDF Download**

How to Buy/Download NCEE Past Questions & Answers

Interested in getting the updated & complete copy (all subjects) with solved solution,

YEAR

2011 – Till Date

TAKE ACTION

Whatsapp us on **+2348051311885** for the cost; account number to make payment and how to received your complete copy of the past questions to be sent directly to your email address or whatsapp number in pdf.

MODE OF PAYMENT.

Mobile Transfer, POS or Direct Bank Deposit.

AFTER PAYMENT

Send us the following

Depositor Name:

Name of Product Paid for:

Valid email address.

DELIVERY ASSURANCE

We will deliver the past question to you 3 mins after confirmation of payment to the email you will send to us.

OTHER SERVICES

- ❖ Sale & Online Registration of NCEE
- ❖ Uploading of O'Level Result to Jamb Portal
- ❖ Printing of Jamb Original Result
- ❖ Reprinting of Jamb Change of Course/Institution Slip
- ❖ Result Checker Scratch Card - WAEC, NECO, BECE- NBAIS
- ❖ [Post UTME Past Questions](#)
- ❖ [School of Nursing Past Questions](#)
- ❖ [WAEC/NECO SSCE Past Questions](#)

WHATSAPP +2348051311885

FIND BELOW FREE NCEE PAST QUESTION

PAPER 1 (PART A & B) FOR YEAR 2022

2022 National Common Entrance Examination (NCEE)

PAPER I. ACHIEVEMENT TEST TIME ALLOWED: 2 hours 10 mins.

Part A: MATHEMATICS AND BASIC SCIENCE AND TECHNOLOGY

Part B: ENGLISH STUDIES AND NATIONAL VALUES EDUCATION

INSTRUCTIONS TO CANDIDATES:

Do not open this booklet until you are told to do so. While you are waiting, read the following carefully.

- There are sixty questions in Mathematics and Basic Science and Technology paper for which you are allowed 65 minutes. Also, there are sixty questions in English Studies and National Values Education paper for which you are allowed 65 minutes.
- Use HB pencil throughout.
- All diagrams in Mathematics are not drawn to scale.
- Check that the details printed on your answer sheet are correct.
 - In the space marked "Name", check that your name is printed correctly.
 - In the box marked "Examination Number", check that the digits of your examination number are correctly printed in the spaces on the left-hand side. There are numbered spaces in line with each of these digits. For each digit, the space with same number as the digit has been shaded.
 - In the box marked "Sex", check that the space marked "M" has been shaded if you are a male, or "F" if you are a female.

An example is given below for a male candidate whose examination number is 413257AE.

- When you have chosen the answer to a question, shade the space which has the same letter as the letter of the answer you have chosen. Shade it like this [A] [B] [C] [D] [E]

EXAMINATION NUMBER							
4	1	3	2	5	7	A	E
[0]	[0]	[0]	[0]	[0]	[0]	[A]	[A]
[1]	[1]	[1]	[1]	[1]	[1]	[B]	[B]
[2]	[2]	[2]	[2]	[2]	[2]	[C]	[C]
[3]	[3]	[3]	[3]	[3]	[3]	[D]	[D]
[4]	[4]	[4]	[4]	[4]	[4]	[E]	[E]
[5]	[5]	[5]	[5]	[5]	[5]	[F]	[F]
[6]	[6]	[6]	[6]	[6]	[6]	[G]	[G]
[7]	[7]	[7]	[7]	[7]	[7]	[H]	[H]
[8]	[8]	[8]	[8]	[8]	[8]	[I]	[I]
[9]	[9]	[9]	[9]	[9]	[9]	[J]	[J]

SEX	
Indicate your sex by shading M (Male)	<input checked="" type="checkbox"/> M
F (Female)	<input type="checkbox"/> F

- Leave extra spaces blank if the answer spaces provided are more than you need.
- Do not make any marking(s) across the heavy black marks at the right edge of your answer sheet.
- Think carefully before you shade the answer spaces. Erase completely any answer(s) you wish to change.
- Do not shade more than one answer space for a question (if you do, you will score zero for that question).
- When you are told to begin, answer the questions as quickly and carefully as you can. If you cannot answer a question, do not spend too much time on it, but try the next one.
- Do not ask any question(s) once the examination has started. The Supervisor is not allowed to explain any question(s) to you during the examination.

PART A

MATHEMATICS

1. What is MCMXCII in Hindu -Arabic numerals system?
 - A. 1192
 - B. 1902
 - C. 1009
 - D. 1992
 - E. 1999
2. Which of these numbers: 1, 3, 6, 11 and 12 are prime numbers?
 - A. 1 and 3
 - B. 1 and 11
 - C. 3 and 11
 - D. 1, 3 and 11
 - E. 6, 11 and 12
3. Change 120 seconds to minute(s).
 - A. 1
 - B. 2
 - C. 6
 - D. 12
 - E. 60
4. Arrange the following fractions in descending order: $\frac{1}{4}, \frac{1}{2}, \frac{3}{4}, \frac{2}{3}$.
 - A. $\frac{3}{4}, \frac{2}{3}, \frac{1}{2}, \frac{1}{4}$
 - B. $\frac{1}{4}, \frac{1}{2}, \frac{2}{3}, \frac{3}{4}$
 - C. $\frac{2}{3}, \frac{3}{4}, \frac{1}{2}, \frac{1}{4}$
 - D. $\frac{3}{4}, \frac{2}{3}, \frac{1}{4}, \frac{1}{2}$
 - E. $\frac{2}{3}, \frac{3}{4}, \frac{1}{4}, \frac{1}{2}$
5. If a cup costs 2 pounds and the rate of exchange is a pound to six hundred and forty naira, find its cost in naira.
 - A. 320.00
 - B. 638.00
 - C. 642.00
 - D. 1,140.00
 - E. 1,280.00
6. Find the even number between 19 and 41 that is a multiple of 7.
 - A. 26
 - B. 28
 - C. 34
 - D. 36
 - E. 38
7. Find the square root of $2\frac{1}{4}$.
 - A. $\frac{1}{8}$
 - B. $\frac{1}{4}$
 - C. $\frac{1}{2}$
 - D. $1\frac{1}{4}$
 - E. $1\frac{1}{2}$
8. Calculate the simple interest on ₦800.00 for 4 years at the rate of 6% per annum.
 - A. ₦186.00
 - B. ₦192.00
 - C. ₦196.00
 - D. ₦220.00
 - E. ₦232.00

9. If two-third of a number is 60, what is one-sixth of that same number?
- A. 75
B. 60
C. 45
D. 30
E. 15
10. The H.C.F. of two numbers is 3. Which of the following pairs represents the two numbers in the options below?
- A. 12 and 17
B. 10 and 20
C. 9 and 15
D. 8 and 12
E. 4 and 6
11. 25% of ₦500.00 is less than one of the following by ₦80.00.
- A. ₦195.00
B. ₦205.00
C. ₦225.00
D. ₦230.00
E. ₦240.00
12. Change ₦32.08 to kobo.
- A. 320
B. 328
C. 330
D. 3,208
E. 3,280
13. How many ₦10.00 added up to make ₦1,000.00?
- A. 10
B. 50
C. 100
D. 110
E. 1,000
14. Change $7\frac{1}{2}\%$ to fraction in its lowest term.
- A. $\frac{1}{2}$
B. $\frac{3}{20}$
C. $\frac{1}{20}$
D. $\frac{3}{40}$
E. $\frac{1}{40}$
15. Convert 8 weeks 8 days to days.
- A. 64
B. 56
C. 48
D. 39
E. 28
16. The marked price of an article is ₦8,200.00. If a customer receives ₦410.00 as a discount on the article, what percentage is the discount?
- A. 4
B. 5
C. 6
D. 8
E. 10
17. Subtract 8 cm 7 mm from 42 cm 5 mm.
- A. 34 cm 8 mm
B. 34 cm 13 mm
C. 33 cm 98 mm
D. 33 cm 8 mm
E. 32 cm 15 mm

18. A man drives his car at an average speed of 76 km/h. Calculate the distance covered in $3\frac{1}{2}$ hours.

- A. 22 km
- B. 76 km
- C. 228 km
- D. 266 km
- E. 304 km

19. Three boys shared certain numbers of mangoes in the ratio 5: 3: 2. If the one with the smallest ratio received 40 mangoes, find the number of mangoes shared.

- A. 80
- B. 100
- C. 120
- D. 160
- E. 200

20. Bola bought six books at ₦45.00 each and sold them for ₦230.00. How much does she loss?

- A. ₦50.00
- B. ₦45.00
- C. ₦40.00
- D. ₦30.00
- E. ₦5.00

21. Evaluate $\frac{2}{3} \times \frac{3}{4} + \frac{5}{6} + \frac{2}{3}$.

- A. $1\frac{3}{4}$
- B. $1\frac{2}{3}$
- C. $1\frac{1}{2}$
- D. $\frac{5}{6}$
- E. $\frac{2}{3}$

22. If $-2x = 6$, find the value of x.

- A. -12
- B. -3
- C. 3
- D. 6
- E. 12

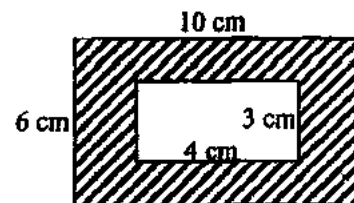
23. Solve for x if $3 = 15x - 2$.

- A. $\frac{1}{5}$
- B. $\frac{1}{3}$
- C. $\frac{2}{5}$
- D. $\frac{1}{2}$
- E. $\frac{2}{3}$

24. Given that the area of a rectangle is 42 cm^2 and its breadth is 6 cm, find its length.

- A. 3 cm
- B. 5 cm
- C. 7 cm
- D. 9 cm
- E. 12 cm

25. Find the area of the shaded portion in the diagram below.



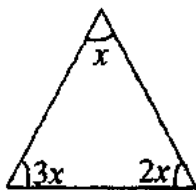
- A. 72 cm^2
- B. 65 cm^2
- C. 54 cm^2
- D. 48 cm^2
- E. 36 cm^2

26. Solve the equation: $2x = 30 - 3x$.
- A. 5
 - B. 6
 - C. 9
 - D. 11
 - E. 15
27. Find the circumference of a circle whose radius is $\frac{21}{4}$ cm.
(Take $\pi = \frac{22}{7}$)
- A. 21 cm
 - B. 32 cm
 - C. 33 cm
 - D. 66 cm
 - E. 173 cm
28. If $\boxed{y} - 8 = 12$, what is the value of y ?
- A. 4
 - B. 6
 - C. 8
 - D. 12
 - E. 20
29. How many faces does a cube have?
- A. 2
 - B. 4
 - C. 5
 - D. 6
 - E. 8
30. Find the area of a rectangle whose length is 8 cm and breadth 4 cm.
- A. 32 cm^2
 - B. 30 cm^2
 - C. 24 cm^2
 - D. 18 cm^2
 - E. 12 cm^2
31. What is a five-sided polygon called?
- A. Decagon
 - B. Heptagon
 - C. Hexagon
 - D. Octagon
 - E. Pentagon
32. A rectangle has how many lines of symmetry?
- A. 1
 - B. 2
 - C. 3
 - D. 4
 - E. 5
33. Find the volume of a cylinder whose base area is 84 cm^2 and height 6 cm. [Take $\pi = \frac{22}{7}$]
- A. 78 cm^2
 - B. 90 cm^2
 - C. 240 cm^2
 - D. 404 cm^2
 - E. 504 cm^2
34. Find the area of a circle whose diameter is 7 cm.
- A. 154.0 cm^2
 - B. 77.0 cm^2
 - C. 58.5 cm^2
 - D. 40.0 cm^2
 - E. 38.5 cm^2
35. What is the height of a triangle whose area is 144 cm^2 and base 16 cm?
- A. 10 cm
 - B. 12 cm
 - C. 14 cm
 - D. 16 cm
 - E. 18 cm

36. Ese is 24 years old and her younger sister is 18 years old. What was the sum of their ages 12 years ago?

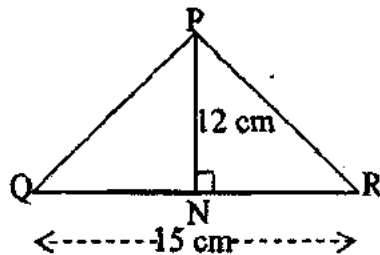
- A. 14 years
- B. 15 years
- C. 16 years
- D. 17 years
- E. 18 years

37. Find the value of x in the shape below.



- A. 30°
- B. 45°
- C. 60°
- D. 116°
- E. 130°

38. Calculate the area of the triangle below.



- A. 45 cm^2
- B. 60 cm^2
- C. 90 cm^2
- D. 120 cm^2
- E. 180 cm^2

39. What is the average of the following set of numbers: 6, 3, 2, 5, 5, 6, 8?

- A. 2
- B. 3
- C. 5
- D. 6
- E. 7

40. Find the mode of the following set of numbers: 3, 2, 1, 0, 2, 3, 4, 2, 4?

- A. 0
- B. 1
- C. 2
- D. 3
- E. 4

BASIC SCIENCE AND TECHNOLOGY

BASIC SCIENCE

41. Which of the following is **not** an effect of air pollution?
- A. Eye irritation
 - B. Lung disease
 - C. Runny nose
 - D. Severe dysentery
 - E. Skin disease
42. Which of the following is a function of the canines?
- A. Biting
 - B. Chewing
 - C. Grinding
 - D. Swallowing
 - E. Tearing

43. The weather symbol represented in the diagram below is



- A. cloudy.
 - B. hazy.
 - C. rainy.
 - D. sunny.
 - E. windy.
44. The reaction between oil and caustic potash during soap production is
- A. condensation.
 - B. purification.
 - C. saponification.
 - D. separation.
 - E. solidification.

45. The force that pulls an object from a height to the ground is

- A. electrical.
- B. frictional.
- C. gravitational.
- D. magnetic.
- E. tension.

PHYSICAL AND HEALTH EDUCATION

46. Which of the following is a short distance race?

- A. 400 metres
- B. 1,500 metres
- C. 3,000 metres
- D. 5,000 metres
- E. 10,000 metres

47. Which of the following is a rhythmic movement?

- A. Crawling
- B. Lifting
- C. Marching
- D. Pulling
- E. Pushing

48. Forward roll is an activity performed in

- A. aquatics.
- B. athletics.
- C. gymnastics.
- D. soccer.
- E. tennis.

49. Strength is measured by pull-up while balance is by
- A. beam walk.
 - B. minute run.
 - C. press-up.
 - D. sit-up.
 - E. toe touch.
50. How many players make a team in a game of football?
- A. 10
 - B. 11
 - C. 13
 - D. 20
 - E. 22

BASIC TECHNOLOGY

51. Latex is obtained from the _____ of a rubber tree.
- A. bark
 - B. branch
 - C. flower
 - D. leaf
 - E. root

52. The diagram below represents



- A. crowbar.
- B. pliers.
- C. scissors.
- D. screwdriver.
- E. tweezers.

53. Which of these is an example of a third class lever?
- A. Crowbar
 - B. Hammer
 - C. Pliers
 - D. Seesaw
 - E. Shovel

54. Products of underdeveloped technology includes the following **except**
- A. axe.
 - B. hook.
 - C. cutlass.
 - D. hoe.
 - E. blower.

55. Which of the following is the fastest means of modern transportation?
- A. Aeroplane
 - B. Car
 - C. Motorbike
 - D. Ship
 - E. Train

COMPUTER STUDIES

56. Google is an example of a/an
- A. antivirus.
 - B. internet browser.
 - C. operating system.
 - D. search engine.
 - E. virus.

57. The acronym IT stands for
- A. Information Technology.
 - B. Information Terminology.
 - C. Information Transformation.
 - D. Internet Technology.
 - E. Internet Terminology.

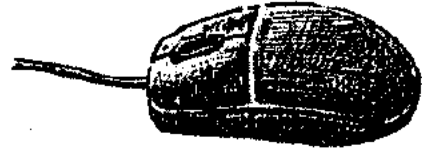
58. The process of starting up a computer is

- A. booting.
- B. computing.
- C. hibernating.
- D. loading.
- E. operating.

59. Which of the following is **not** a computer hardware?

- A. Cursor
- B. Keyboard
- C. Monitor
- D. Motherboard
- E. Mouse

60. The diagram below represents a



- A. joystick.
- B. keyboard.
- C. monitor.
- D. mouse.
- E. printer.

PART B
ENGLISH STUDIES
SECTION A

COMPREHENSION

Read the passages below carefully and answer the questions that follow by choosing the most appropriate of the options lettered A – E (Nos. 1 – 10).

PASSAGE I

A good night sleep is very important for your health. Your brain and your body use that time to do all kinds of things that they cannot do when you are awake. How much sleep do you need? Every person is a little different, but many experts say that children need about ten hours of sleep per night. So if you wake up at seven o'clock to go to school, you should be going to bed by nine o'clock at night.

Sometimes it is not easy to fall asleep quickly, though you might have a lot of energy, or you might be excited about something. When you are worried about something, then it is hard to get sleepy. Here are some things you can do to make it easier for you to get the sleep you need: keep your body in a routine of going to bed at the same time every night; do something calming right before bedtime, such as taking a warm bath or reading; limit sodas, iced tea and other foods and drinks that contain caffeine; turn off your TV when it is time to sleep or better still, don't have a TV in your bedroom. Studies have shown that children who have a TV in their rooms sleep less. Don't watch scary TV shows or movies close to bedtime because these can sometimes make it hard for one to fall asleep. Exercise during the day will help you sleep better at night. But don't exercise just before going to bed; don't do homework, play games or talk on the phone in bed. Use your bed just for sleeping and train your body to associate the bed with sleep.

If you follow these handy tips, you will get yourself relaxed before bedtime and, it will be easier for you to fall asleep and stay asleep.

1. Why is a good night sleep important for children's health? It
 - A. helps children to gain a lot of energy.
 - B. is a body building mechanism.
 - C. is a period for the brain and the body to function effectively.
 - D. keeps the body in a proper routine and makes it active.
 - E. makes one's immune system stronger to fight sicknesses.
2. The main aim of this passage is to
 - A. analyse.
 - B. criticise.
 - C. educate.
 - D. entertain.
 - E. persuade.

3. According to the passage, the author discourages having a TV in a bedroom in order to
- A. allow children use their beds just for sleeping.
 - B. calm down before bedtime.
 - C. create the much needed time for children to study.
 - D. prevent children from sleeping less.
 - E. prevent children from watching scary TV shows.
4. According to the writer, caffeinated drinks and foods can
- A. damage the brain.
 - B. keep you awake.
 - C. keep you healthy.
 - D. make you sick.
 - E. make you sleepy.
5. One of these is **not** true according to the passage.
- A. Day time exercise helps one sleep at night.
 - B. Exercising before going to bed helps one to sleep.
 - C. Reading is one of those calming activities.
 - D. Regularise your bedtime.
 - E. Turn off your TV when it is bedtime.

PASSAGE II

I had always lived in fear of water. When my friends practised swimming, I had always stayed away because my mother had made me promise her never to go swimming and I kept this promise very well.

On this day, after spending a long time at the stream, trying in vain to catch fish, my friends pulled off their clothes and jumped into the stream. I stood on the bank watching them. They jeered at me and called me "his mother's son." I was tempted to get into the water to prove to them that I was not the fool they took me for.

I was still gazing attentively at the stream when one boy, who had quietly crept behind me, gave me a push. I fell heavily into the water. I was in my clothes and could not swim. I tried to shout, but I took in a gulp of water each time.

I went deep down and it was dark; I was pushed up again and I saw daylight. It was then I heard the boys laughing at me. Down I went again and felt I was going to drown and these wicked boys were going to continue laughing until I die. At that moment, I remembered my mother and even my sister and felt sorry for them. They would weep and weep when I was gone. I felt sorry for myself; I was going to die young.

Then a hand *gripped* me by the waist and at first I wanted to hold tight to this hand. But when I knew that it was trying to save me I controlled myself. When I was pulled out, I was tired.

6. Which of the following statements is not true according to the passage?
The writer
- A. almost drowned in the stream.
 - B. and his friends could not catch any fish at the stream.
 - C. had always been afraid of water.
 - D. joined his friends to swim.
 - E. kept the promise he made to his mother.
7. It is clear from the passage that the boy
- A. has never swum before.
 - B. knew he was going to die young.
 - C. loved his mother very much.
 - D. tried to prove to his friends that he was not a fool.
 - E. wept for his mother, sister and himself.
8. When he heard the other boys laughing, the writer
- A. felt sorry for himself.
 - B. felt sorry for them.
 - C. felt the boys were wicked.
 - D. knew he would be saved.
 - E. thought of revenge.
9. According to the passage, the boys were laughing because the writer
- A. appeared funny to them.
 - B. could not swim.
 - C. had his clothes on.
 - D. obeyed his mother.
 - E. was about to drown.

10. Which of the following words can replace "gripped" as used in the passage?

- A. Aided
- B. Handled
- C. Held
- D. Lifted
- E. Nabbed

SECTION B: LEXIS

Choose from the options lettered A-E the one that is *nearest in meaning* to the word in italics (Nos. 11 – 15).

11. The lost girl was found by a *brave* police officer.

- A. clever
- B. courageous
- C. quiet
- D. smart
- E. timid

12. Prince Audu was *banned* from the village.

- A. accepted in
- B. expelled from
- C. isolated from
- D. removed from
- E. welcomed to

13. The class monitor was asked to *collect* the pupils' classwork.

- A. gather
- B. group
- C. separate
- D. share
- E. submit

14. Usain Bolt *set* the world record as the fastest runner in 100 metres.

- A. broke
- B. exceeded
- C. kicked
- D. lost
- E. topped

15. My mother has a diamond ring that *glitters*.

- A. brightens
- B. darkens
- C. dims
- D. faints
- E. shines

Choose from the options lettered A-E the one that is *most nearly opposite in meaning* to the word in italics (Nos. 16 – 20).

16. It is good to be *polite* to others.

- A. aggressive
- B. attentive
- C. kind
- D. rude
- E. wicked

17. My brother is *stingy*.

- A. generous
- B. greedy
- C. helpful
- D. mean
- E. wasteful

18. Anita's handwriting is *legible*.

- A. bold
- B. clear
- C. clumsy
- D. faint
- E. neat

19. I was *scared* on seeing the dog.

- A. afraid
- B. calmed
- C. confident
- D. frightened
- E. terrified

20. Grace broke the *fragile* vase.

- A. delicate
- B. expensive
- C. heavy
- D. light
- E. strong

SECTION C: STRUCTURE

Complete each of the following statements with the *most appropriate* of the options lettered A-E (Nos. 21 – 40).

21. Allen is not only tall _____ handsome.

- A. and
- B. but
- C. nor
- D. or
- E. yet

22. Which of the following suffixes can combine with the word "understand" to form a new word?

- A. -able
- B. -en
- C. -less
- D. -ly
- E. -ment

23. Active voice: The teacher marked the test.

Passive voice: The test _____ marked by the teacher.

- A. is
- B. is being
- C. was
- D. was being
- E. were

24. The pupils are _____ for the kind gestures.

- A. grateful
- B. gratful
- C. greateful
- D. greatful
- E. greetful

25. It is not advisable to _____ directly from the tap.

- A. drank
- B. drink
- C. drinking
- D. drinks
- E. drunk

26. The new textbook is as _____ as the old one.

- A. impartant
- B. important
- C. impotent
- D. impotant
- E. inportant

27. Beauty wore her wristwatch

- A. herself.
- B. himself.
- C. myself.
- D. ourselves.
- E. themselves.

28. The bag is dirty, _____ it?
A. does
B. doesn't
C. is
D. isn't
E. was
29. If I _____ your father, you won't disobey me.
A. am
B. have been
C. have being
D. was
E. were
30. The giraffe is considered the _____ of all animals.
A. more uglier
B. most ugliest
C. uglier
D. ugliest
E. ugly
31. He walked _____ the hospital walkway.
A. by
B. in
C. inside
D. on
E. through
32. She wore a _____ dress to the party.
A. beautiful new red
B. beautiful red new
C. new beautiful red
D. new red beautiful
E. red new beautiful
33. The boy could not eat his food _____ he was sad.
A. although
B. because
C. even
D. if
E. yet
34. Annah was tired of lying _____ the bed throughout the day.
A. below
B. by
C. in
D. on
E. over
35. The leaking pipe was fixed by the
A. carpenter.
B. cobbler.
C. engineer.
D. mason.
E. plumber.
36. We spent _____ of time trying to figure out the puzzle.
A. a lot
B. little
C. many
D. plenty
E. so much
37. He wet his bed, didn't he?
A. No, he did.
B. No, he does.
C. Yes, he did.
D. Yes, he didn't.
E. Yes, he does.

38. Which of the following words contain the sound /b/?
- A. Comb
 - B. Debt
 - C. Doubt
 - D. Obey
 - E. Plumb
39. We saw a _____ of monkeys on our father's farm.
- A. class
 - B. gang
 - C. group
 - D. school
 - E. troop
40. We were *all ears* as Ada narrated the story. This means that we were
- A. angry.
 - B. attentive.
 - C. happy.
 - D. restless.
 - E. surprised.
43. The first aid box contains the following **except**
- A. iodine.
 - B. plaster.
 - C. razor.
 - D. scissors.
 - E. syringe.
44. A man having more than one wife at a time is practicing
- A. exogamy.
 - B. monogamy.
 - C. polyandry.
 - D. polygamy.
 - E. sororate.
45. The period during which a couple develops relationship before getting married is
- A. courtship.
 - B. engagement.
 - C. introduction.
 - D. proposal.
 - E. wedding.

NATIONAL VALUES EDUCATION

SOCIAL STUDIES

41. We show loyalty to our country by
- A. doing our chores.
 - B. going to school.
 - C. joining the army.
 - D. respecting elders.
 - E. respecting national symbols.
42. Which of the following forms of marriage is culturally oriented?
- A. Civil
 - B. Contract
 - C. Court
 - D. Religious
 - E. Traditional
46. Food is safe for eating when
- A. cooked properly.
 - B. it contains chemicals.
 - C. it is infected.
 - D. the packaging is open.
 - E. we ignore expiry date.
47. The head of a local government authority in Nigeria is the
- A. chairman.
 - B. councillor.
 - C. governor.
 - D. president.
 - E. senator.

48. Stream water is made germ free after it has been
- A. boiled.
 - B. bottled.
 - C. refrigerated.
 - D. sampled.
 - E. stored.
49. A common item presented during traditional marriage in Nigeria is
- A. cassava.
 - B. cucumber.
 - C. groundnut.
 - D. kolanut.
 - E. snuff.
50. A good leader is a person who _____ others.
- A. cheats
 - B. guides
 - C. humbles
 - D. ignores
 - E. scares
53. Traditional rulers help to _____ disputes among the subjects.
- A. increase
 - B. introduce
 - C. promote
 - D. resuscitate
 - E. settle
54. Which of these activities promote growth and development in children?
- A. Exercise
 - B. Fatigue
 - C. Jesting
 - D. Loitering
 - E. Revelling
55. Identifying with one's country and support for its interest is
- A. citizenship.
 - B. honesty.
 - C. humility.
 - D. patriotism.
 - E. tribalism.

CIVIC EDUCATION

51. The act of directing people to achieve a common goal is
- A. authority.
 - B. dominance.
 - C. leadership.
 - D. order.
 - E. power.
52. Which of the following attributes is expected of members of the community?
- A. Desperation
 - B. Pride
 - C. Selfishness
 - D. Selflessness
 - E. Vengeance
56. The agency that monitors the production of consumables in Nigeria is
- A. Economic and Financial Crimes Commission.
 - B. Federal Road Safety Commission.
 - C. National Agency for Food and Drug Administration and Control.
 - D. National Orientation Agency.
 - E. World Health Organization.

57. The payment made to a person who does daily job is

- A. bribe.
- B. gift.
- C. imprest.
- D. salary.
- E. wage.

60. Security officials use ___ to check customers into the bank.

- A. barking dog
- B. dummy camera
- C. metal detector
- D. security light
- E. siren padlock

SECURITY EDUCATION

58. Which of the following officers renders voluntary security service in the community?

- A. Policeman
- B. Road marshal
- C. Soldier
- D. Traffic warden
- E. Vigilante

59. The organisation responsible for collecting import duties in Nigeria is the

- A. Department of State Services.
- B. National Drug Law Enforcement Agency.
- C. Nigeria Armed Forces.
- D. Nigeria Customs Service.
- E. Nigeria Police Force.

National Common Entrance Examination NCEE **Past Questions and Answers Free PDF Download**

How to Buy/Download NCEE Past Questions & Answers

Interested in getting the updated & complete copy (all subjects) with solved solution,

YEAR

2011 – Till Date

TAKE ACTION

Whatsapp us on **+2348051311885** for the cost; account number to make payment and how to received your complete copy of the past questions to be sent directly to your email address or whatsapp number in pdf.

MODE OF PAYMENT.

Mobile Transfer, POS or Direct Bank Deposit.

AFTER PAYMENT

Send us the following

Depositor Name:

Name of Product Paid for:

Valid email address.

DELIVERY ASSURANCE

We will deliver the past question to you 3 mins after confirmation of payment to the email you will send to us.

OTHER SERVICES

- ❖ Sale & Online Registration of NCEE
- ❖ Uploading of O'Level Result to Jamb Portal
- ❖ Printing of Jamb Original Result
- ❖ Reprinting of Jamb Change of Course/Institution Slip
- ❖ Result Checker Scratch Card - WAEC, NECO, BECE- NBAIS
- ❖ [Post UTME Past Questions](#)
- ❖ [School of Nursing Past Questions](#)
- ❖ [WAEC/NECO SSCE Past Questions](#)